



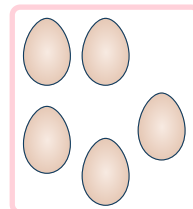
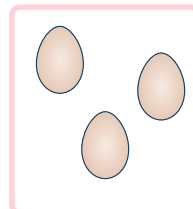
To know how to compare numbers of objects (1)

1 Circle the group that has more.

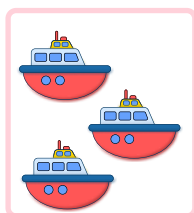
a



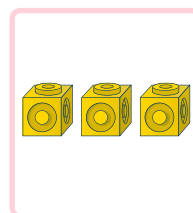
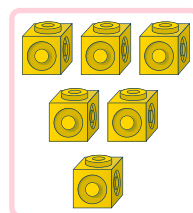
b



c





d

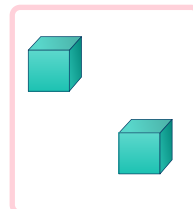
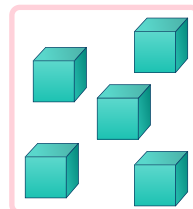


2 Tick the groups that show the same number of objects.


a

☐



b

☐

c

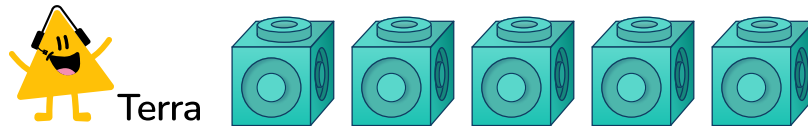
☐

d

☐

To know how to compare numbers of objects (1)

- 3 Terra has 5 cubes.
Hoki has 3 more cubes than Terra.
Can you draw Hoki's cubes?



Challenge:

Cedar has more cubes than Terra but fewer cubes than Hoki.
How many cubes could Cedar have?

To know how to compare numbers of objects (1)

Question Number	Question	Answer
1	Circle the group that has more.	Group with 4 apples Group with 5 eggs Group with 3 boat Group with 6 cubes
2	Tick the groups that show the same number of objects.	a, c, d
3	<p>Terra has 5 cubes. Hoki has 3 more cubes than Terra. Can you draw Hoki's cubes?</p> <p>Challenge: Cedar has more cubes than Terra but fewer cubes than Hoki. How many cubes could Cedar have?</p>	<p>Hoki will have 8 cubes. Challenge: Cedar could have 6 or 7 cubes</p>