

To know how to order objects and numbers

1 Use Base 10 to make the numbers below.

a Order these numbers from greatest to smallest.

seventy

twenty-seven

seventeen

thirty-seven

b Order these numbers from smallest to greatest.

forty

fourteen

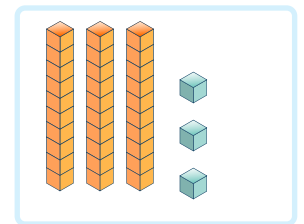
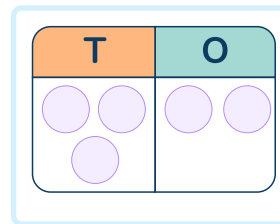
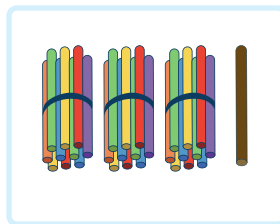

thirty-four

twenty-four

2 Here are 4 representations.

Which numbers do they show?

Order the numbers from smallest to greatest.

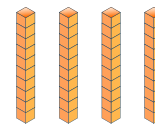


3 These numbers have been ordered from smallest to greatest.
Circle the statements that are correct.

a

twenty

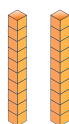

31



The last number could be 43.

The last number could be 35.

b



27

thirty-one

The first number could be 16.

The first number could be 10.

To know how to order objects and numbers

Question Number	Question	Answer
1	a) Order these numbers from greatest to smallest. b) Order these numbers from smallest to greatest.	a) 70, 37, 27, 17 b) 14, 24, 34, 40
2	Here are 4 representations. Which numbers do they show? Order the numbers from smallest to greatest.	Number shapes - 34, sticks - 31, place value chart - 32, base 10 - 33. Smallest to greatest - sticks, place value chart, base 10, number shapes.
3	These numbers have been ordered from smallest to greatest. Circle the statements that are correct.	a) 'The last number could be 43' is correct because 43 is greater than 40. b) Both statements are correct. 16 and 10 are both smaller than 20.