

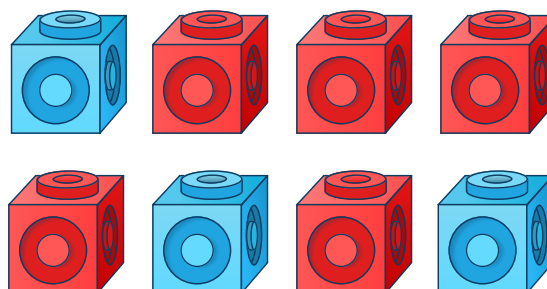
To know how to count objects

1 Complete the sentences.

There are red cubes.


There are blue cubes.

There are cubes altogether.




2 Count the fruit and write the answers in the box.

a




b




c




d



e




f



To know how to count objects


- 3 The Mathlings are talking about the number of apples in each box.
Who do you agree with? Why?



The number of apples is the same in each box.



Cedar



The number of apples is not the same in each box.



Terra

To know how to count objects

Question Number	Question	Answer
1	Complete the sentences.	There are 5 red cubes. There are 3 blue cubes. There are 8 cubes altogether.
2	Count the fruit and write the answers in the box.	a) 4 b) 5 c) 3 d) 7 e) 6 f) 2
3	The Mathlings are talking about the number of apples in each box. Who do you agree with? Why?	Cedar is correct. The number of apples is the same in each box. There are 8 apples in each box. It doesn't matter how the apples are arranged, the number is still the same.