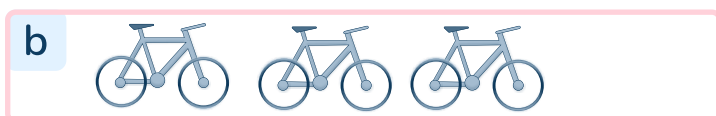


## To understand how to order objects and numbers

- 1 Order the groups of bikes from greatest to smallest.



--	--	--



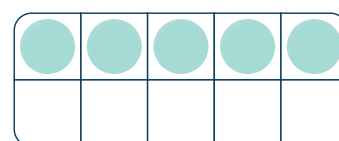

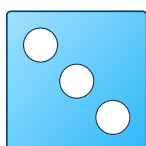
- 2 Order the number cards from smallest to greatest.



a  is the greatest number.      b  is the smallest number.

c  is greater than       d  is smaller than

- 3 The numbers are ordered from greatest to smallest.  
Do you agree?



## To understand how to order objects and numbers

Question Number	Question	Answer
1	Order the groups of bikes from greatest to smallest.	b, a, c
2	Order the number cards from smallest to greatest.	2, 3, seven a) 7 is the greatest number. b) 2 is the smallest number. c and d) The sentence stems can be completed in a range of ways e.g. seven is greater than 2. Seven is greater than 3. 2 is smaller than 3. 2 is smaller than seven.
3	The numbers are ordered from greatest to smallest. Do you agree?	No. The numbers should be in the order 8 (number shape) , 5 (ten frame), 3 (dice)